

English

In preparation for Remembrance Day on Monday and our topic lessons next week research different Remembrance poems or War poems. You could stick some different ones in your book and write why you like those particular poems.

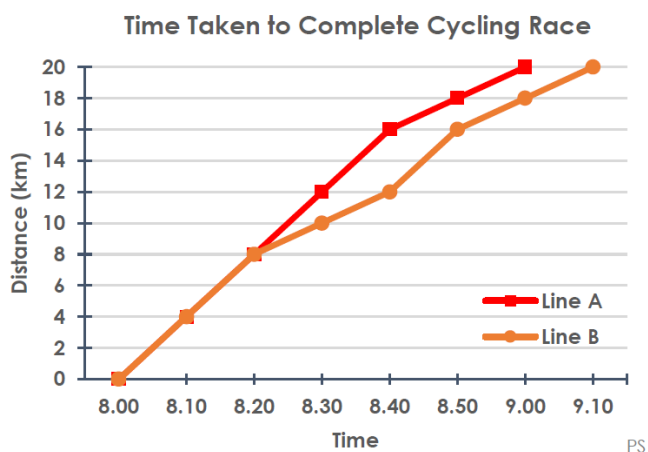
Year 4 Maths

Draw the correct time on the clock when you do the following activities.

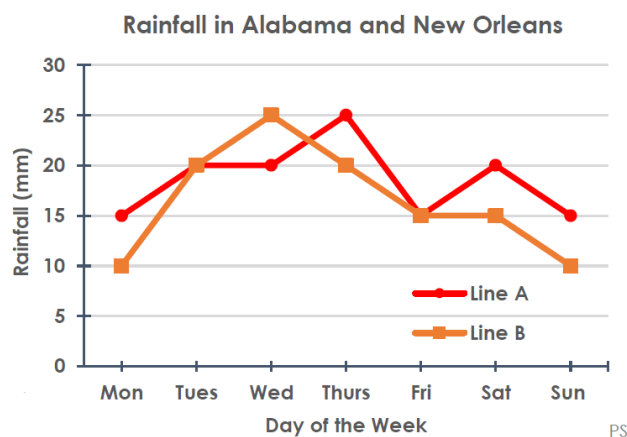
- Get up
- Eat breakfast
- Go to school
- Get home from school
- Eat tea
- Go to bed

Year 5 Maths- Work out the following problems.

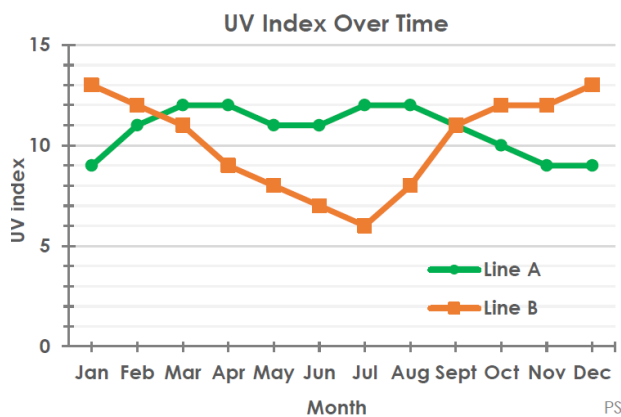
Kim reached the finishing line of the cycling race before Danny. Which line represents Kim's performance?



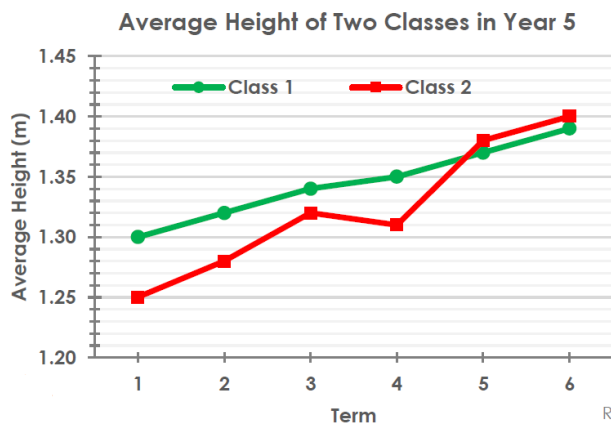
Last week, it rained less in Alabama than it did in New Orleans. Which line represents Alabama's rainfall?



The UV Index was higher overall in Panama than Madagascar. Which line represents Madagascar?



Emilio made a mistake when he plotted his line graph. Where do you think the mistake was made? Convince me.



Spellings-

There will now be a Year 4 spelling list and a Year 5 spelling list.
Please ensure you are learning the correct list.

Year 4	Year 5
busily gently horribly terribly lazily scientifically basically multiplication operation preparation	unhappy unfair supermarket anticlockwise automatic antiseptic refresh submerge supermodel autobiography